

Matematik Katten



Minus

Niveau 1

Løs minusstykkerne:

$$3 - 1 = \underline{\hspace{2cm}}$$

$$3 - 1 = \underline{\hspace{2cm}}$$

$$3 - 2 = \underline{\hspace{2cm}}$$

$$4 - 2 = \underline{\hspace{2cm}}$$

$$5 - 2 = \underline{\hspace{2cm}}$$

$$5 - 3 = \underline{\hspace{2cm}}$$

Løs minusstykkerne:

$$2 - 1 = \underline{\hspace{2cm}}$$

$$3 - 1 = \underline{\hspace{2cm}}$$

$$3 - 2 = \underline{\hspace{2cm}}$$

$$4 - 2 = \underline{\hspace{2cm}}$$

$$5 - 2 = \underline{\hspace{2cm}}$$

$$4 - 3 = \underline{\hspace{2cm}}$$

$$6 - 4 = \underline{\hspace{2cm}}$$

$$5 - 1 = \underline{\hspace{2cm}}$$

Løs minusstykkerne:

$$5 - 1 = \underline{\hspace{2cm}}$$

$$5 - 3 = \underline{\hspace{2cm}}$$

$$4 - 1 = \underline{\hspace{2cm}}$$

$$4 - 3 = \underline{\hspace{2cm}}$$

$$1 - 1 = \underline{\hspace{2cm}}$$

$$3 - 2 = \underline{\hspace{2cm}}$$

$$3 - 3 = \underline{\hspace{2cm}}$$

$$4 - 4 = \underline{\hspace{2cm}}$$

Løs minusstykkerne:

$$1 - 1 = \underline{\hspace{2cm}}$$

$$2 - 2 = \underline{\hspace{2cm}}$$



$$4 - 1 = \underline{\hspace{2cm}}$$

$$5 - 4 = \underline{\hspace{2cm}}$$

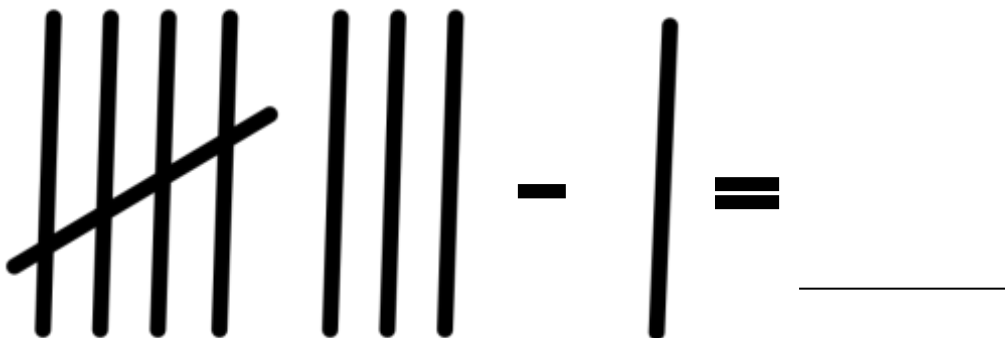
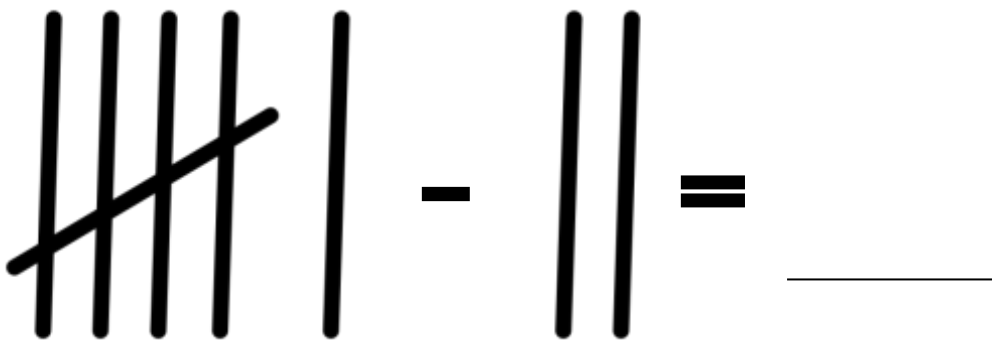
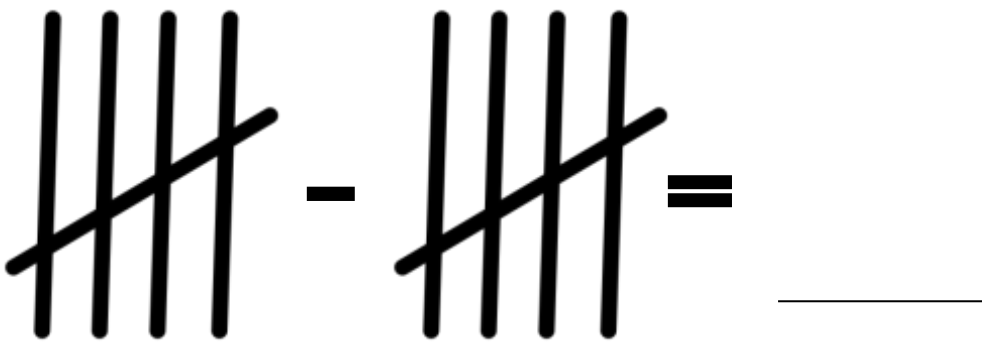
$$6 - 1 = \underline{\hspace{2cm}}$$

$$6 - 3 = \underline{\hspace{2cm}}$$

Løs minusstykkerne:



Løs minusstykkerne:



Løs minusstykkerne:

$$\cancel{||||} || - ||| = \underline{\quad}$$

$$\cancel{||||} |||| - || = \underline{\quad}$$

Løs minusstykkerne:

$2 - 1 = \underline{\quad}$

$5 - 3 = \underline{\quad}$

$6 - 4 = \underline{\quad}$

$7 - 5 = \underline{\quad}$

$4 - 1 = \underline{\quad}$

$0 - 0 = \underline{\quad}$

$9 - 3 = \underline{\quad}$

$8 - 4 = \underline{\quad}$

Lav snor fra minusstykket til ballonen:




$10 - 2$


$15 - 5$

$7 - 1$


Løs minusstykkerne:




$$\underline{4} - \underline{1} = \underline{3}$$




$$\underline{\quad} - \underline{\quad} = \underline{\quad}$$



$$\underline{\quad} - \underline{\quad} = \underline{\quad}$$



$$\underline{\quad} - \underline{\quad} = \underline{\quad}$$



$$\underline{\quad} - \underline{\quad} = \underline{\quad}$$

Løs minusstykkerne:

$$\begin{array}{cccc} | & | & | & | \\ | & | & | & | \\ | & | & | & | \\ | & | & | & | \end{array} - \begin{array}{cccc} | & | & | & | \\ | & | & | & | \\ | & | & | & | \\ | & | & | & | \end{array} = \underline{\quad}$$

Løs minusstykkerne:

$$\begin{array}{|c|} \hline \text{4} \\ \hline \end{array} - \begin{array}{|c|} \hline \text{4} \\ \hline \end{array} = \underline{\hspace{2cm}}$$

$$\begin{array}{|c|} \hline \text{4} \\ \hline \end{array} - \begin{array}{|c|} \hline \text{4} \\ \hline \end{array} = \underline{\hspace{2cm}}$$

$$\begin{array}{|c|} \hline \text{4} \\ \hline \end{array} - \begin{array}{|c|} \hline \text{4} \\ \hline \end{array} = \underline{\hspace{2cm}}$$

Løs minusstykkerne:

$$\begin{array}{|c|c|} \hline \text{6} & \text{3} \\ \hline \end{array} - \underline{\hspace{2cm}} = \underline{\hspace{2cm}}$$

$$\begin{array}{|c|c|} \hline \text{6} & \text{4} \\ \hline \end{array} - \underline{\hspace{2cm}} = \underline{\hspace{2cm}}$$

Løs minusstykkerne:

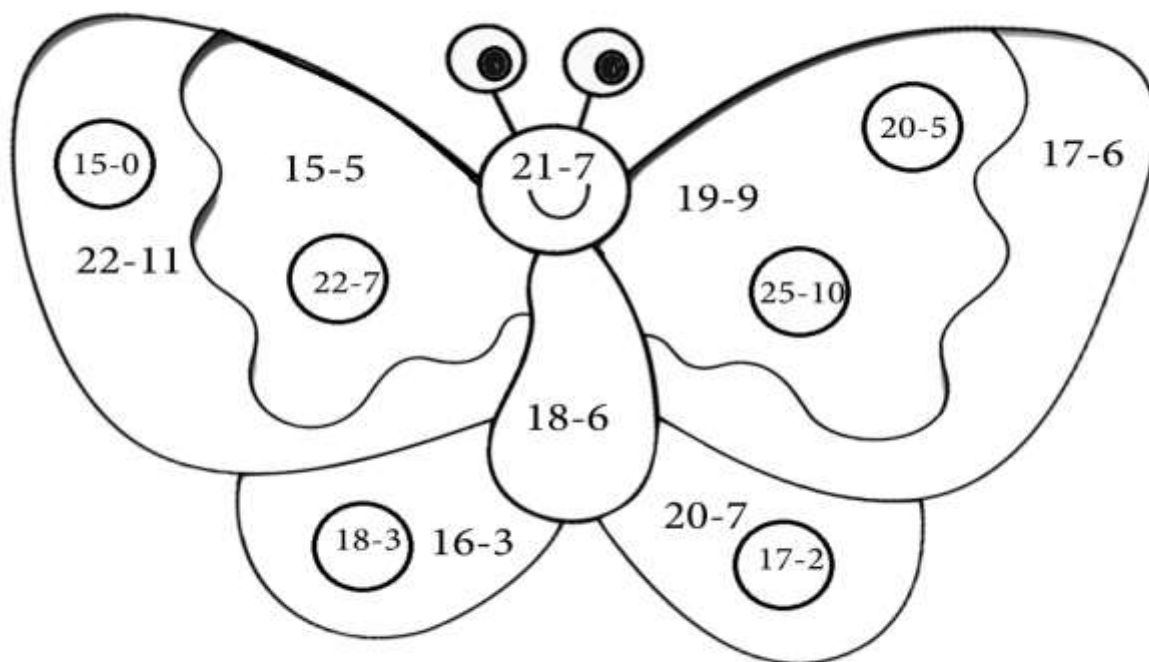
$9 - 1 = \underline{\quad}$ $10 - 3 = \underline{\quad}$ $7 - 4 = \underline{\quad}$ $5 - 5 = \underline{\quad}$

$11 - 1 = \underline{\quad}$ $14 - 0 = \underline{\quad}$ $13 - 3 = \underline{\quad}$ $15 - 4 = \underline{\quad}$


$8 - 6 = \underline{\quad}$ $15 - 3 = \underline{\quad}$ $14 - 4 = \underline{\quad}$ $16 - 5 = \underline{\quad}$

Løs minusstykkerne og farv sommerfuglen:

10 = **Rød** 11 = **Grøn** 12 = **Sort** 13 = **Bla** 14 = **Grå** 15 = **Gul**



Lav dine egne domino minusstykker:





$$\underline{5} - \underline{2} = \underline{3}$$



$$\underline{\quad} - \underline{\quad} = \underline{\quad}$$

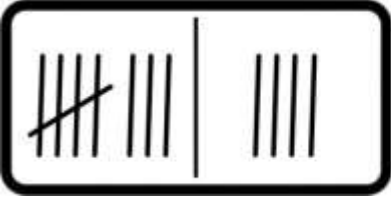



Lav dine egne domino minusstykker:

	_____	-	_____	=	_____
	_____	-	_____	=	_____

Løs minusstykkerne:

$20 - 1 =$ _____	$19 - 4 =$ _____	$15 - 8 =$ _____	$16 - 5 =$ _____
$22 - 1 =$ _____	$14 - 5 =$ _____	$18 - 3 =$ _____	$15 - 2 =$ _____
$21 - 6 =$ _____	$22 - 3 =$ _____	$13 - 4 =$ _____	$16 - 9 =$ _____

Lav dine egne streg minusstykker:

	<u>8</u>	-	<u>4</u>	=	<u>4</u>
	_____	-	_____	=	_____
	_____	-	_____	=	_____
	_____	-	_____	=	_____

Lav dine egne streg minusstykker:

--	--

$$\underline{\quad} - \underline{\quad} = \underline{\quad}$$

--	--

$$\underline{\quad} - \underline{\quad} = \underline{\quad}$$

--	--

$$\underline{\quad} - \underline{\quad} = \underline{\quad}$$

Farv de regnestykker, der giver resultatet 20:

$20-0$ $28-5$ $29-9$ $22-2$ $23-2$ $22-1$
 $25-3$ $27-7$ $20-1$ $23-3$ $24-2$ $25-5$

Lav snor fra minusstykket til ballonen:



$$20-3$$

$$19-5$$

$$22-3$$

Til læreren



Bogen "MatematikKatten Minus Niveau 1" er første bog i serien om minus, og er lavet til elever, der oplever, at matematikken er i vanskeligheder. Elever som oplever, at matematikken er i vanskeligheder, har brug for genkendelighed og gentagelser. Bogen byder derfor på mange gentagelser samt genkendelighed, der gør denne bog anvendelig for elever der oplever, at matematikken er i vanskeligheder.

Rigtig god fornøjelse med bogen.

Om Matematik i vanskeligheder

Matematik i vanskeligheder laver produkter samt undervisningsmaterialer til elever, som oplever at matematikken er i vanskeligheder. Jeg arbejder ud fra en positiv filosofi om, at det er matematikken, som er i vanskeligheder og ikke den enkelte elev.

Få en masse gratis inspiration til din egen undervisning på <https://www.facebook.com/matematikivanskeligheder/>