

MatematikKatten




Bokmål

Monsterjakt

Tallene fra
1 - 10

Hvilket tall gemmer seg bak monsteret?


1	2	3	4	5	6	7	8	9	10
---	---	---	---	---	---	---	---	---	----

1	2	3	4		6	7	8	9	10
---	---	---	---	---	---	---	---	---	----



Hvilket tall gemmer seg bak monsteret?


1	2	3	4	5	6	7	8	9	10
---	---	---	---	---	---	---	---	---	----

1	2	3	4	5	6	7		9	10
---	---	---	---	---	---	---	---	---	----




Hvilket tall gemmer seg bak monsteret?

1	2	3	4	5	6	7	8	9	10
---	---	---	---	---	---	---	---	---	----

	2	3	4	5	6	7	8	9	10
---	---	---	---	---	---	---	---	---	----

 _____

Hvilket tall gemmer seg bak monsteret?

1	2	3	4	5	6	7	8		10
---	---	---	---	---	---	---	---	---	----

 _____

Hvilket tall gjemmer seg bak monsteret?

1	2	3	4	5	6		8	9	10
---	---	---	---	---	---	---	---	---	----





Hvilke tall gjemmer seg bak monstrene?

1	2	3	4	5		7	8	9	
---	---	---	---	---	--	---	---	---	--





Hvilke tall gjemmer seg bak monstrene?



1		3	4	5		7	8	9	10
---	---	---	---	---	---	---	---	---	----



Hvilke tall gemmer seg bak monstrene?

1	2	3	4		6	7		9	10
---	---	---	---	---	---	---	---	---	----



1	2	3	4			7	8	9	10
---	---	---	---	---	---	---	---	---	----




	2		4	5	6	7	8	9	10
---	---	---	---	---	---	---	---	---	----



Hvilke tall gemmer seg bak monstrene?

1	2		4		6	7	8	9	
---	---	---	---	---	---	---	---	---	---






	2	3	4	5		7		9	10
---	---	---	---	---	---	---	---	---	----



	2	3	4	5	6	7		9	
---	---	---	---	---	---	---	---	---	---







Hvilke tall gemmer seg bak monstrene?

1	2	3			6	7		9	10
---	---	---	---	---	---	---	---	---	----







		3	4	5	6	7		9	10
--	--	---	---	---	---	---	--	---	----



	2	3	4		6			9	10
---	---	---	---	---	---	--	---	---	----



Hvilke tall gemmer seg bak monstrene?

1	2	3				7	8	9	
---	---	---	---	---	---	---	---	---	---













		3		5	6	7	8	9	
--	--	---	--	---	---	---	---	---	--









1	2	3		5		7			10
---	---	---	---	---	---	---	---	---	----














Hvilke tall gemmer seg bak monstrene?

	2	3		5	6	7	8		
---	---	---	---	---	---	---	---	---	---




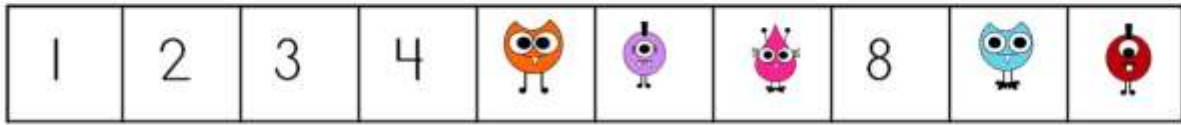
1	2			5			8	9	
---	---	---	---	---	---	---	---	---	---



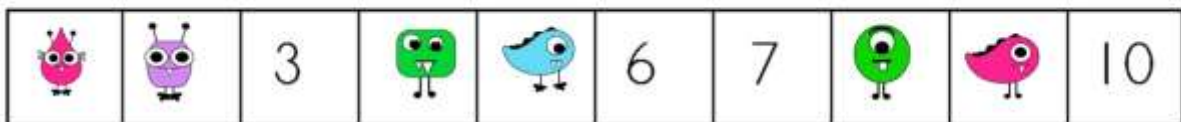

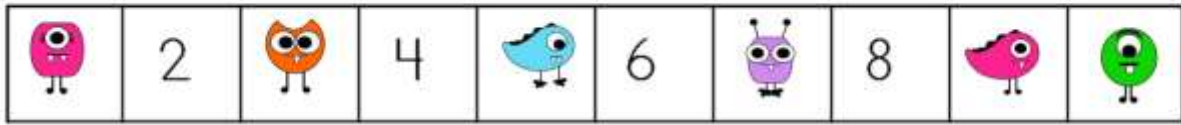
	2		4		6		8		10
---	---	---	---	---	---	---	---	---	----




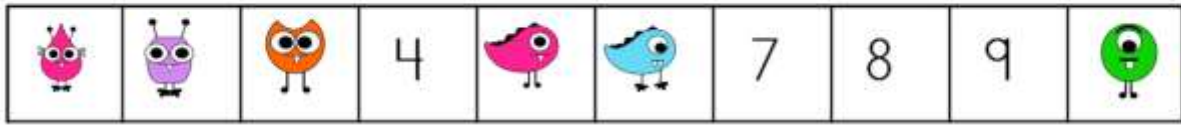
Hvilke tall gemmer seg bak monstrene?



Hvilke tall gemmer seg bak monstrene?



Hvilke tall gemmer seg bak monstrene?



Lag dine egne oppgaver. Se om noen andre klarer å finne ut hvilke tall som gjemmer seg bak monstrene du tegner.

1	2	3	4	5	6	7	8	9	10
---	---	---	---	---	---	---	---	---	----

1	2	3	4	5	6	7	8	9	10
---	---	---	---	---	---	---	---	---	----

1	2	3	4	5	6	7	8	9	10
---	---	---	---	---	---	---	---	---	----

Til læreren



Heftet Matematikk-katten – Monsterjakt om tallene fra 1 – 10 er første hefte i serien om tallrekka. Heftet er laget for elever som synes at matematikk kan være vanskelig. Heftet har derfor mange gjentakelser, noe som er bra for elever som strever med tallforståelsen.

I de første oppgavene får eleven støtte i ei tallinje. Oppgavene stiger sakte i vanskegrad, de starter med at eleven skal finne ett tall og slutter med at en må finne seks tall.

Om «Matematik i vanskeligheder»:

«Matematik i vanskeligheder» er dansk og lager produkt og undervisningsmateriell til elever som synes at matematikk kan være vanskelig. De jobber ut fra en positiv filosofi om at det er matematikken som kan være et problem og ikke at den enkelte elev har et problem.

Du kan finne mye gratis inspirasjon til egen undervisning på:

<https://www.facebook.com/matematikivanskeligheder/>